





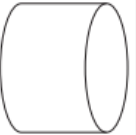





**Incoming 1<sup>st</sup> Grade  
Math Calendar – July  
Due: Friday, September 6<sup>th</sup>**

Monday	Tuesday	Wednesday	Thursday	Friday
1	2	3	4	5
$1 + 3 = \square$	Tracy had 10 heart stickers. She lost 1 sticker. How many stickers are left?	Robin sees 5 apples in a bag and 10 apples in a bowl. Draw a picture to show how many apples there are.	Tatiana had 10 juice boxes. 3 juice boxes broke and spilled. How many full juice boxes does she have left?	Count to 50.
8	9	10	11	12
Jump three times.	Write the following number:  6	$1 + 4 = \square$	How many cubes are here? 	 Is this a circle?
15	16	17	18	19
How many cubes are here? 	Search your kitchen to see what shapes and solids you can find. Name 3 of them.	How many more dots are needed to make 10? 	Zayne had 6 round crackers and 3 square crackers. How many crackers did Zayne have in all?	Is this shape FLAT or SOLID? 
22	23	24	25	26
Riley had 9 crayons. Her friend gave her 1 crayon. How many crayons did Riley have in all?	Draw the same number of circles as below 	Is this shape FLAT or SOLID? 	Which is heavier? 	Stan had 10 blueberries. He ate 5 berries. How many blueberries are left?
29	30	31		
Which is heavier? 	Make 5 from what you have below 	Subtract. $5 - 1 = \square$ $5 - 2 = \square$ $5 - 3 = \square$		