

Name : _____

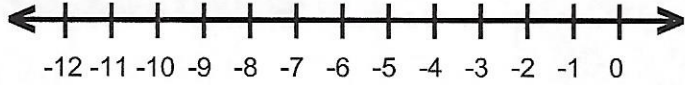
Score : _____

Teacher : _____

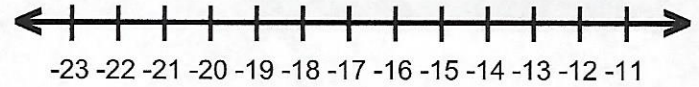
Date : _____

Solve and Graph the Inequalities

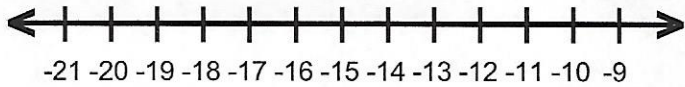
1) $h - 5 < -10$



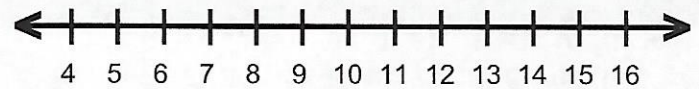
6) $k + 8 \geq -8$



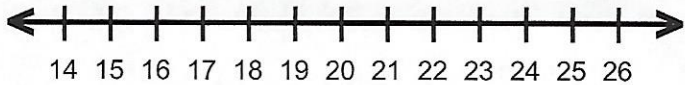
2) $s + 5 > -9$



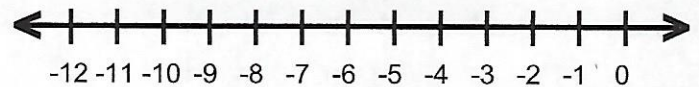
7) $f + 2 > 10$



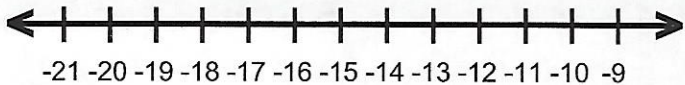
3) $16 \geq -8 + a$



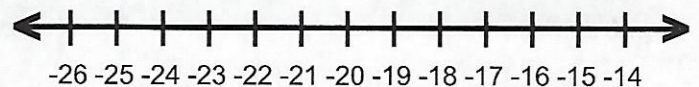
8) $-4 + d \leq -7$



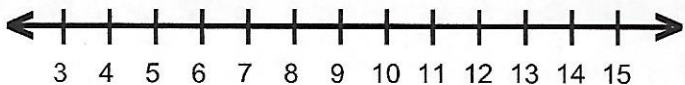
4) $9 + r < -7$



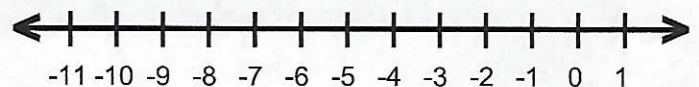
9) $-12 \leq z + 8$



5) $c + 6 > 17$



10) $-14 \geq g - 5$



Name : _____

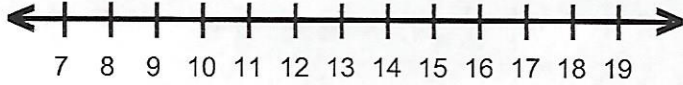
Score : _____

Teacher : _____

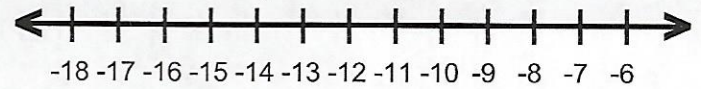
Date : _____

Solve and Graph the Inequalities

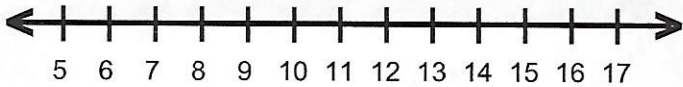
1) $\frac{c}{3} < 4$



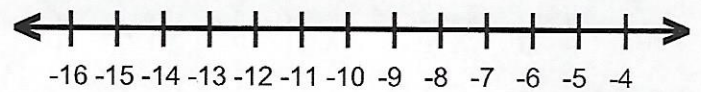
6) $-4 \leq \frac{s}{3}$



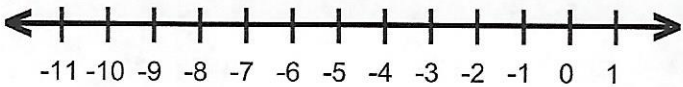
2) $39 < 3b$



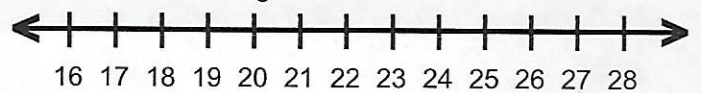
7) $30 \leq -5n$



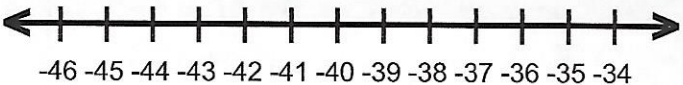
3) $4f > -24$



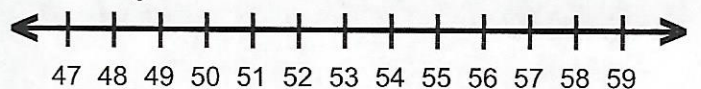
8) $4 \geq \frac{k}{5}$



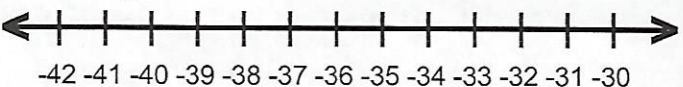
4) $-11 \geq \frac{r}{4}$



9) $\frac{g}{6} < 9$



5) $\frac{y}{5} \leq -7$



10) $2x > 22$

