

# Grade 2 Summer Math Assignment

Name \_\_\_\_\_

**Materials: crayons**

Show your work.

Add or subtract.

1.  $37 + 22 = \underline{\quad}$

2.  $47¢ - 25¢ = \underline{\quad}$

Compare. Write  $<$ ,  $=$ , or  $>$ .

3.  $29 \bigcirc 31$

4.  $98 \bigcirc 97$

Make each side equal.

Write the missing number.

5.  $10 + 7 = 9 + \square$

6.  $\square - 2 = 17 - 6$

Write the missing signs.

7.  $9 \bigcirc 7 = 16$

8.  $15 \bigcirc 7 = 8$

9. Circle coins equal to 25¢.



Draw a picture to solve.

10. Kaye puts 2 erasers in each party bag. She makes 10 party bags. How many erasers does she have?

GO ON

Name \_\_\_\_\_

11. Subtract. Check by adding.

$$\begin{array}{r} 71 \\ - 23 \\ \hline \end{array}$$

$$+ \begin{array}{r} \phantom{00} \\ \phantom{00} \\ \hline \end{array}$$

12. What is 10 more than 72?

\_\_\_\_\_

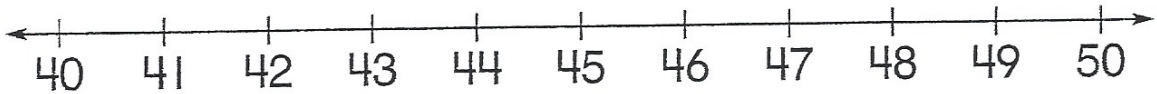
What is 10 less than 72?

\_\_\_\_\_

13. Count by 5s to write the missing numbers.


\_\_\_\_\_, 50, 55, \_\_\_\_\_, \_\_\_\_\_, 70, \_\_\_\_\_, \_\_\_\_\_, 85, \_\_\_\_\_

14. Is 48 closer to 40 or 50?

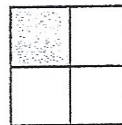


48 is closer to \_\_\_\_\_.

15. What fraction of the set is shaded?



16. What fraction of the shape is shaded?



Find the sum or difference.

17. 
$$\begin{array}{r} 80 \\ - 65 \\ \hline \end{array}$$

18. 
$$\begin{array}{r} 56 \\ - 28 \\ \hline \end{array}$$

19. 
$$\begin{array}{r} 47 \\ + 18 \\ \hline \end{array}$$

20. 
$$\begin{array}{r} 29 \\ - 24 \\ \hline \end{array}$$

Name \_\_\_\_\_

Color one part of each set. Write the fraction for the part you colored.



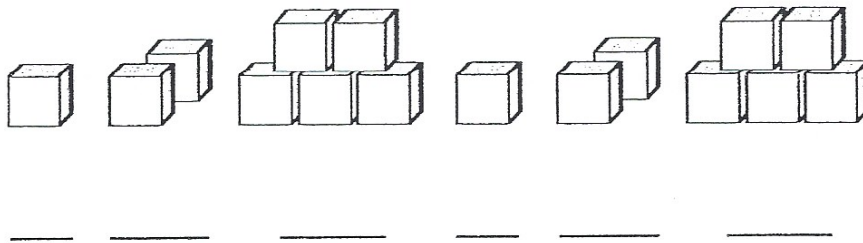
23. Draw to complete the pattern.



24. Circle the type of pattern you see in question 28.

1 hour                       $\frac{1}{2}$  hour

25. Find the pattern. Show the same pattern using numbers.



26. An even number less than 45. \_\_\_\_\_

27. An odd number greater than 45. \_\_\_\_\_

28. A number with a 4 in the tens place. \_\_\_\_\_

29. Jen has 42 apples. She gives some to her class. She now has 3 apples. How many apples does Jen give to her class?

\_\_\_\_\_ apples

